



**ARMY BURN HALL COLLEGE FOR GIRLS ABBOTTABAD
ENTRANCE- EXAM 2024**

CLASS: II

SUBJECT: MATHS

TIME: 1 HOUR

MAX MARKS :50

Name: _____

Q.No	1	2	3	4	5	6	7	Total
Marks	6	6	10	10	8	5	5	50
Marks Obt								
Sign.exm								

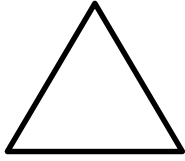


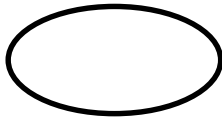

Q1: Fill in the blanks : **(6)**

1. 7 is _____ than 5
a. Smaller (b) greater (c) equal (d) none
2. _____ comes before 45.
a. 46 (b) 44 (c) 47 (d) 48
3. _____ comes after 80
a. 83 (b) 82 (c) 81 (d) 84
4. One 5-rupees coin =(_____) 1-rupee coin
a. 4 (b) 5 (c) 6 (d) 7
5. March is the _____ month of the year.
a. First (b) Second (c) Third (d) Fourth
6. Circle has _____ sides.
a. 0 (b) 1 (c) 2 (d) 5
7. 10 : 00 is read as _____
a. 1 o'clock (b) 10 o'clock (c) half past 10 (d) 12 o'clock
8. 15- 10=_____
a. 25 (b) 15 (c) 5 (d) 20
9. 17+3=_____
a. 20 (b) 37 (c) 23 (d) 18
10. Last Islamic month of the year is _____
a. Ziqad (b) Zilhaj (c) Ramadan (d) Safar
11. Second month of solar year is _____.
a. January (b) February (c) March (d) April
12. Eid -ul- Fitr is celebrated on the 1st of _____.
a. Shabaan (b) Zilhajj (c) Shawal (d) Rajab

Q2: Write the missing numbers: **(6)**

31			34	
	37	38		40
		43		
	47		49	

Q3: Name the Shapes: **(10)**

Q4: Write the numbers in words:

(10)

45 _____
28 _____
19 _____
39 _____
51 _____

Q5: Solve:

(8)

T	O	T	O	T	O	T	O
7	2	3	5	4	2	6	2
+1	5	- 3	2	+3	6	-3	1
_____		_____		_____		_____	
_____		_____		_____		_____	

Q6: Haris bought a train cost RS. 63 and a duck cost Rs. 25 from a toy store. How much did he spend altogether?

(05)

Cost of train = Rs. _____
Cost of duck = Rs. _____
= _____
Total money spent = _____

Q7: There were 15 eggs in a tray . Hareem's mother used 5 eggs to bake a cake. How many eggs were left in the tray?

(05)

T O

Total eggs = _____
Eggs used = _____

Eggs left = _____